

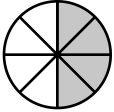
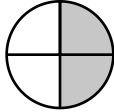
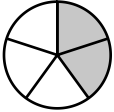
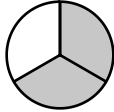
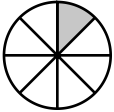
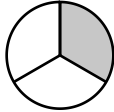
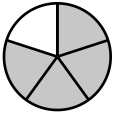
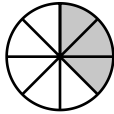
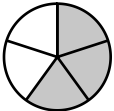
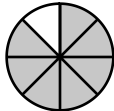
Name : _____

Score : _____

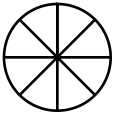
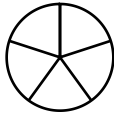
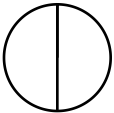
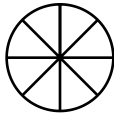
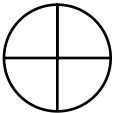
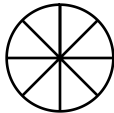
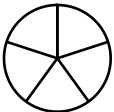


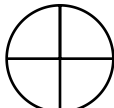
Teacher : _____

Date : _____

What is the Fraction of the Shaded Area ?

- | | | | | | |
|-----|--|-------|------|---|-------|
| 1) |  | _____ | 6) |  | _____ |
| 2) |  | _____ | 7) |  | _____ |
| 3) |  | _____ | 8) |  | _____ |
| 4) |  | _____ | 9) |  | _____ |
| 5) |  | _____ | 10) |  | _____ |

Shade the Figure with the Indicated Fraction.

- | | | | | | |
|------|---|---------------|------|--|---------------|
| 11) |  | $\frac{2}{8}$ | 16) |  | $\frac{2}{5}$ |
| 12) |  | $\frac{1}{2}$ | 17) |  | $\frac{6}{8}$ |
| 13) |  | $\frac{3}{4}$ | 18) |  | $\frac{5}{8}$ |
| 14) |  | $\frac{4}{5}$ | 19) |  | $\frac{1}{5}$ |
| 15) |  | $\frac{3}{5}$ | 20) |  | $\frac{1}{4}$ |



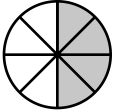
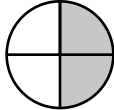
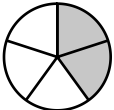
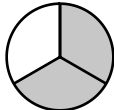
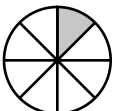
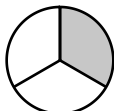
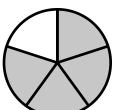
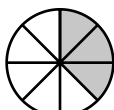
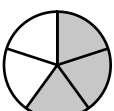
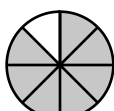
Name : _____

Score : _____

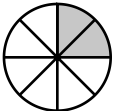
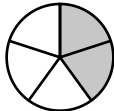
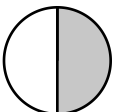
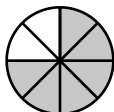
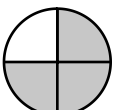
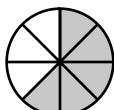
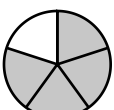

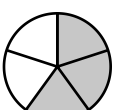
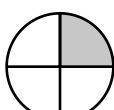
Teacher : _____

Date : _____

What is the Fraction of the Shaded Area ?

- | | | | | | |
|-----|--|---------------------------------|------|---|---------------------------------|
| 1) |  | <u>$\frac{4}{8}$</u> | 6) |  | <u>$\frac{2}{4}$</u> |
| 2) |  | <u>$\frac{2}{5}$</u> | 7) |  | <u>$\frac{2}{3}$</u> |
| 3) |  | <u>$\frac{1}{8}$</u> | 8) |  | <u>$\frac{1}{3}$</u> |
| 4) |  | <u>$\frac{4}{5}$</u> | 9) |  | <u>$\frac{3}{8}$</u> |
| 5) |  | <u>$\frac{3}{5}$</u> | 10) |  | <u>$\frac{7}{8}$</u> |

Shade the Figure with the Indicated Fraction.

- | | | | | | |
|------|---|---------------------------------|------|--|---------------------------------|
| 11) |  | <u>$\frac{2}{8}$</u> | 16) |  | <u>$\frac{2}{5}$</u> |
| 12) |  | <u>$\frac{1}{2}$</u> | 17) |  | <u>$\frac{6}{8}$</u> |
| 13) |  | <u>$\frac{3}{4}$</u> | 18) |  | <u>$\frac{5}{8}$</u> |
| 14) |  | <u>$\frac{4}{5}$</u> | 19) |  | <u>$\frac{1}{5}$</u> |
| 15) |  | <u>$\frac{3}{5}$</u> | 20) |  | <u>$\frac{1}{4}$</u> |

